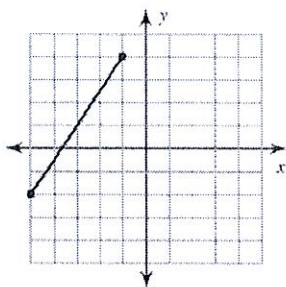


# The Midpoint Formula HW - Lesson 2.7

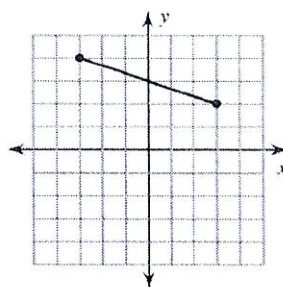
Date \_\_\_\_\_ Period \_\_\_\_\_

Find the midpoint of each line segment.

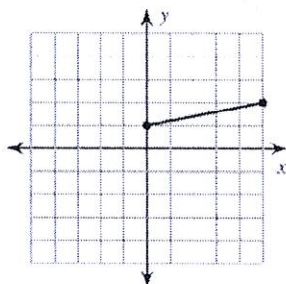
1)



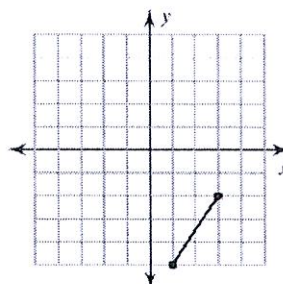
2)



3)



4)



Find the midpoint of the line segment with the given endpoints.

5)  $(6, 1)$ ,  $(-2, 5)$

6)  $(4, 3)$ ,  $(-1, 6)$

7)  $(-5, 4)$ ,  $(-6, 3)$

8)  $(4, -3)$ ,  $(5, 5)$

9)  $(11, -10)$ ,  $(-3, 9)$

10)  $(8, 2)$ ,  $(9, 8)$

